

## Years, Months, Weeks and Days

1a. Sabrina is 98 months old. Hallie is 6 months younger than Sabrina.

How old is Hallie?

Hallie is  years and  months old.



PS

## Years, Months, Weeks and Days

1b. Julia is 86 months old. Kal is 4 months older than Julia.

How old is Kal?

Kal is  years and  months old.



PS

2a. Leoni is going to visit her family at the seaside. She arrives on the 5<sup>th</sup> January and spends 10 days there before returning home.

Mon	Tue	Wed	Thurs	Fri	Sat	Sun
January						
		1	2	3	4	5
6	7	8	9	10	11	12
13	14	15	16	17	18	19
20	21	22	23	24	25	26
27	28	29	30	31		

What date does she return home?



PS

2b. Albert goes on a skiing holiday for 2 weeks to the Alps. He gets home on the 30<sup>th</sup> November.

Mon	Tue	Wed	Thurs	Fri	Sat	Sun
November						
					1	2
3	4	5	6	7	8	9
10	11	12	13	14	15	16
17	18	19	20	21	22	23
24	25	26	27	28	29	30

What date did he start his holiday?




PS

3a. Jak and Suzie are discussing days.

There are 13 days in a fortnight.



Jak



Suzie

There are 14 days in 2 weeks.


Who is correct? Explain why.




R

3b. Helen and Joel are discussing years.

There are 24 months in 2 years.



Helen



Joel

There are 14 months in 2 years.

Who is correct? Explain why.



R

## Years, Months, Weeks and Days

4a. Elena is 10 years and 1 month old.  
Harry is 13 months younger than Elena.  
Jack is 3 months older than Harry.

How old is Jack?

Jack is  years and  months old.



PS

## Years, Months, Weeks and Days

4b. Hanif is 114 months old.  
Dakota is 6 months younger than Hanif.  
Violet is 6 months older than Dakota.

How old is Violet?

Violet is  years and  months old.



PS

5a. Louisa is going on holiday on the 17<sup>th</sup> August. She spends 1 week in France and 9 days in Spain.

Mon	Tue	Wed	Thurs	Fri	Sat	Sun
August						
		1	2	3	4	5
6	7	8	9	10	11	12
13	14	15	16	17	18	19
20	21	22	23	24	25	26
27	28	29	30	31		
September						
					1	2

What date does she return home?



PS

5b. Jonah is on an expedition. He leaves Peru on the 4<sup>th</sup> July and it takes him 2 weeks to explore the Andes. He then travels for 15 days by bus to Brazil.

Mon	Tue	Wed	Thurs	Fri	Sat	Sun
July						
	1	2	3	4	5	6
7	8	9	10	11	12	13
14	15	16	17	18	19	20
21	22	23	24	25	26	27
28	29	30	31			
August						
				1	2	3

What date does he arrive in Brazil?



PS

6a. Saffie and Kai are discussing months.

The total amount of days in April, May and June is greater than in October, November and December.



Saffie



Kai

The total amount of days in October, November and December is greater than in April, May and June.

Who is correct? Explain why.



R

6b. Daya and Darnell are discussing the month, June.

There are 4 weeks and 3 days in June.



Daya



Darnell

There are 4 weeks and 2 days in June.

Who is correct? Explain why.



R

## Years, Months, Weeks and Days

7a. Thomas is 9 years and 7 months old. Joe is 108 months old. Carla is 6 months older than Joe. Suzie is 9 months younger than Carla.

How old is Carla? How old is Suzie?

Carla is  years and  months old.

Suzie is  years and  months old.



PS

## Years, Months, Weeks and Days

7b. Dante is 110 months old. Charlie is 8 years and 2 months old. Eliza is 5 months older than Dante. Asha is 6 months younger than Charlie.

How old is Eliza? How old is Asha?

Eliza is  years and  months old.

Asha is  years and  months old.



PS

8a. Ethan returns home from travelling on the 3<sup>rd</sup> January. He had been travelling for 1 month, 1 week and 6 days.

Mon	Tue	Wed	Thurs	Fri	Sat	Sun
24	25	26	27	28	29	30
31						
December						
	1	2	3	4	5	6
7	8	9	10	11	12	13
14	15	16	17	18	19	20
21	22	23	24	25	26	27
28	29	30	31			
January						
				1	2	3

What day did he set off travelling?



PS

8b. The date is 12<sup>th</sup> June. Anne has 3 weeks and 6 days left until she is on holiday from school.

Mon	Tue	Wed	Thurs	Fri	Sat	Sun
June						
					1	2
3	4	5	6	7	8	9
10	11	12	13	14	15	16
17	18	19	20	21	22	23
24	25	26	27	28	29	30
July						
1	2	3	4	5	6	7

What date does she break up from school?



PS

9a. Jan and Michael are discussing years.

There are 144 months in 12 years.



Jan



Michael

There are 265 weeks in 5 years.

Who is correct? Explain why.



R

9b. Thea and Vanessa are discussing days.

There are always 90 days in January, February and March.



Thea



Vanessa

There are always 91 days in January, February and March.

Who is correct? Explain why.



R