

















Interpret Charts

1a. Look at the pictogram:

Y4 Pets

Cat	    
Dog	     
Fish	   
Rat	
Snake	



Fill in the blanks in the table.

Cat	Dog	Fish	Rat	Snake
5			1	













VF

Interpret Charts

1b. Look at the pictogram:

Shoe Size

1	 
2	  
3	   
4	  
5	



Fill in the blanks in the table.

1	2	3	4	5
			3	1



VF












2a. Think of one question to ask about the information in this pictogram: *Favourite Drink*

Cherry	   
Banana	    
Mango	     



VF

2b. Think of one question to ask about the information in this pictogram: *Favourite Sport*

Tennis	 
Football	     
Basketball	  







VF

3a. Use the information in the table to complete the pictogram: *Sweets Sold*

	4
	2
	6



	 	
Red	Pink	Blue






VF

3b. Use the information in the table to complete the pictogram: *Toys Sold*

	5
	3
	6

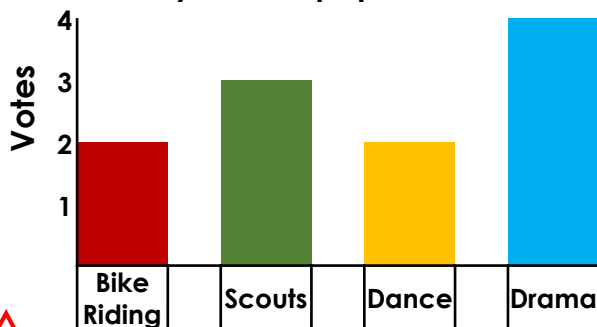


		
drum	yoyo	teddy



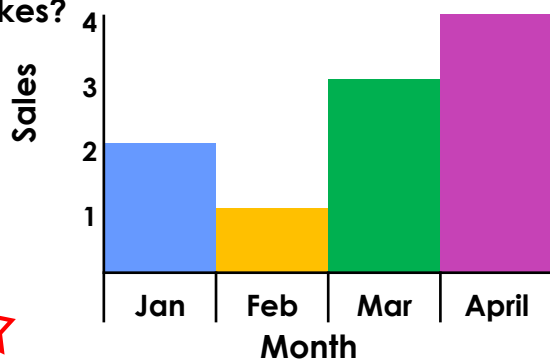
VF

4a. Look at the bar chart: *Y4 Hobbies*
Which hobby is most popular?



VF

4b. Look at the bar chart: *Bikes Sold*
Which month did they sell the fewest bikes?



VF

Interpret Charts

5a. Look at this bar chart:

Distance Travelled



Fill in the blanks in the table below.

Truck 1	Truck 2	Truck 3	Truck 4
		20km	

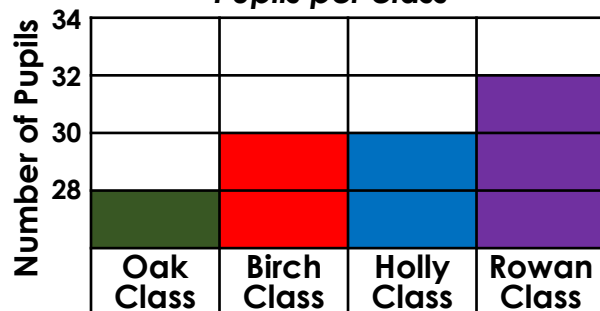


VF

Interpret Charts

5b. Look at this block graph:

Pupils per class



Fill in the blanks in the table below.

Oak	Birch	Holly	Rowan
	30		



VF

6a. Think of two questions to ask about the information in this tally chart:

Breakfast

Cereal	
Fruit & Yoghurt	
Toast	



VF

6b. Think of two questions to ask about the information in this tally chart:

Car Colour

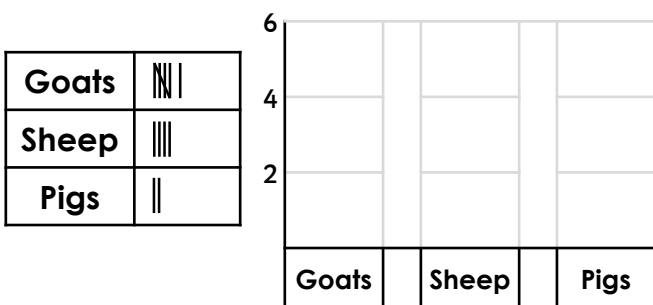
Black	
Silver	
Red	



VF

7a. Use the information in the table to create a bar chart:

Livestock



VF

7b. Use the information in the table to create a bar chart:

Holiday Activities

Hint: Remember to add a scale.

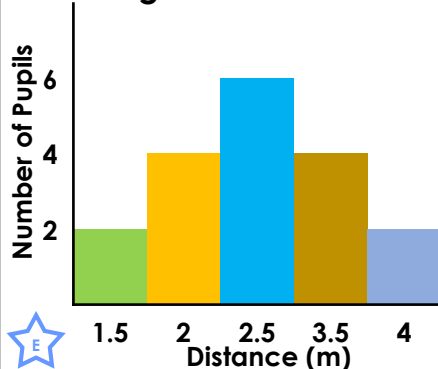
Walk	10
Swim	30
Museum	50



VF

8a. Look at the bar chart:

Distance Beanbag Thrown



A. Which is the furthest distance most pupils could throw?

B. How many pupils threw 3.5 metres or more?



VF

8b. Look at the table:

Vegetables Planted

	Jan	Feb	Mar
Onions	23	32	43
Garlic	36	15	13
Cabbage	12	8	4

A. How many garlic bulbs were planted in February?

B. In which month were the most vegetables planted?

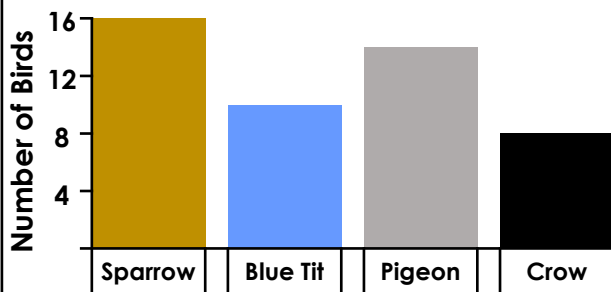


VF

Interpret Charts

9a. Look at this bar chart:

Birds in the Garden



Present the information as a tally chart.

Sparrow			

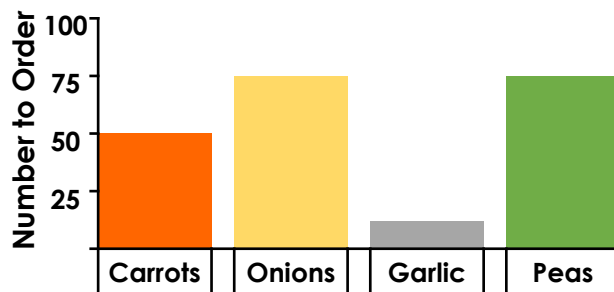


VF

Interpret Charts

9b. Look at this bar chart:

Kitchen Veg Order



Present the information in the table.

Carrots			
50			



VF

10a. Think of at least 3 questions to ask about the table: *Parents' Age*

	23 - 30	30 - 35	35 - 40	40+
Year One	10	12	7	-
Year Two	21	-	6	5
Year Three	6	7	9	13



Work out the answers.

VF

10b. Think of at least 3 questions to ask about the table: *Jobs for Pocket Money*

	Y3	Y4	Y5
Tidy Room	28	30	32
Ironing	10	15	25
Vacuuming	18	23	32




Work out the answers.

VF

11a. Use the information in the table to create a bar chart.

Money saved

Jan	Feb	Mar
£3	£9	£12

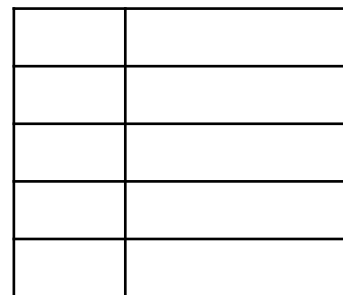


VF

11b. Use the information in the table to create a pictogram.

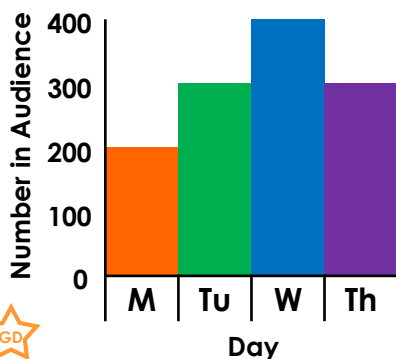
Steps Taken in 1,000s

M	T	W	T	F
8	9	10	12	9



VF

12a. Look at the bar chart: *Audience Members*



A. How many people were in the audience on Wednesday?

B. Which days had more than 250 people in the audience?



VF

12b. Look at the tally chart: *Votes Cast*

4pm - 5pm	
5pm - 6pm	
6pm - 7pm	

A. How many people voted before 5pm?

B. How else could you present this information?



VF