

## Time to the Hour


1. Use the words and numbers in the word bank to complete the sentences to match the clocks.




\_\_\_\_ o'clock



The \_\_\_\_  
is at 2.



\_\_\_\_ o'clock



The \_\_\_\_  
is at 12.



5 \_\_\_\_



minute  
hand

8


hour hand

7

o'clock

VF  
HW/Ext


2. Tick the clocks which are showing the correct time.




7 o'clock

☐


11 o'clock

☐


5 o'clock

☐


9 o'clock

☐


VF  
HW/Ext

3. Use the clues to match the clocks to the children.



Gareth

My time has an even number less than 10.

My time has both hands pointing to the same number on the clock.



Helen

My time is between 2 and 8 o'clock.



Atifa



Clock  
A



Clock  
B



Clock  
C



RPS  
HW/Ext

## Time to the Hour

4. Use the words and numbers in the word bank to complete the sentences to match the clocks.



\_\_\_\_ o'clock



The \_\_\_\_  
is at 12.



\_\_\_\_ o'clock



The \_\_\_\_  
is at 11.



Two \_\_\_\_

minute  
hand

7


five

o'clock


hour hand

VF  
HW/Ext

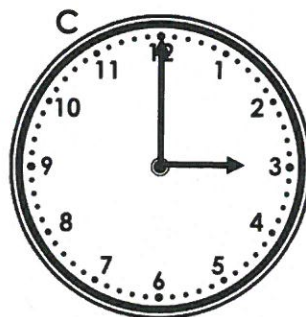
5. Tick the clocks which are showing the correct time.



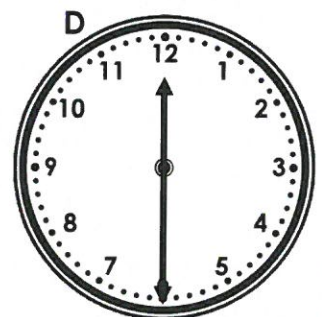
four o'clock

☐


10 o'clock

☐


three o'clock

☐


6 o'clock

☐

VF  
HW/Ext

6. Use the clues to match the clocks to the children.



Nathan

My time has an odd number more  
than six.

My time is between one and five  
o'clock.



Diana

One hand points to half the  
number the other hand points to.



Cerys



Clock  
A



Clock  
B





Clock  
C

RPS  
HW/Ext



## Time to the Hour

7. Complete the sentences to match the clocks, using words not numbers.



\_\_\_\_ o'clock

The \_\_\_\_\_  
is at twelve.

\_\_\_\_ o'clock


The \_\_\_\_\_  
is at four.

Six \_\_\_\_\_




VF  
HW/Ext

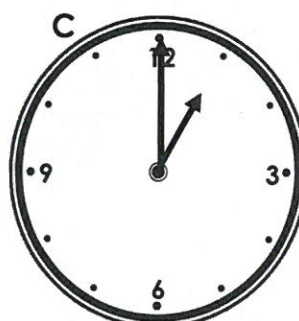
8. Tick the clocks which are showing the correct time.



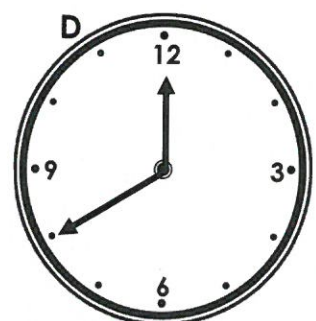
eleven  
o'clock

☐


11 o'clock

☐


1 o'clock

☐


eight o'clock

☐


VF  
HW/Ext

9. Use the clues to match the clocks to the children.



Alex

My time is later than 5 o'clock.

My time is an odd number  
between three and 7 o'clock.



Grayson

My time has both hands opposite  
each other on the clock.




Izzy



Clock  
A



Clock  
B



Clock  
C



RPS  
HW/Ext