



Maths

Home Learning

Year 2 Spring 1 Quiz

Please complete this booklet independently.

This quiz is designed to see your understanding of content that has been covered this half term with some arithmetic style questions (based on your year group).

WB 08.02.21

$10 \times 6 =$

$4 \times 3 =$

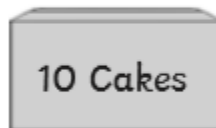
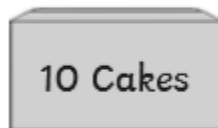
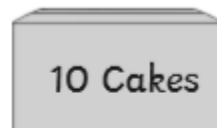
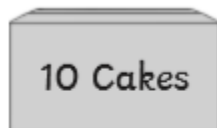
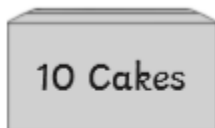
$7 \times 2 =$

$\div 5 = 8$

$18 \div 2 =$

$6 \times 3 =$

14. Cakes are sold in packs of ten.



How many cakes are in the picture above?

11. How many hours are in one day?

17. A shop sells bags of tennis balls in packs of 5.



In a week the shop sells 35 balls.

How many packs of tennis balls are sold?

16. Circle the longer time interval.

1 hour

65 minutes

a) How much money is represented by the following coins?



b) Circle 2 sets of coins that show different ways to make this amount: **75p**



a) Joe has the following coins. How much money does he have?



Nita has these coins. How much money does she have?



b) They put their money together. How much do they have together?

25. Joe has 50p. He buys a small drink for 24p.

His mother then gives him 45p.

How much does he have now?



30. Joe collects 9 five pence pieces. He uses them to buy a toy car for 32p.

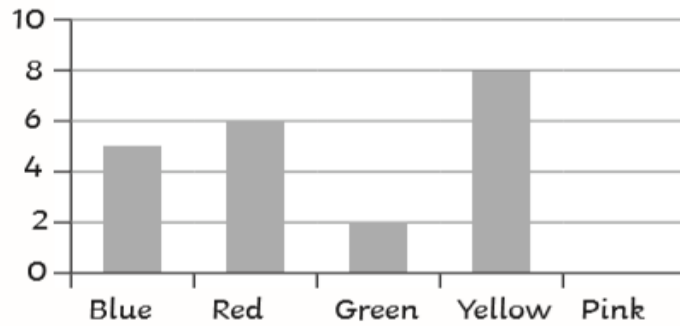


How much does Joe have left?

31. A class choose their favourite colour.

Here is a block diagram showing the choices of the children.

Our Favourite Colours

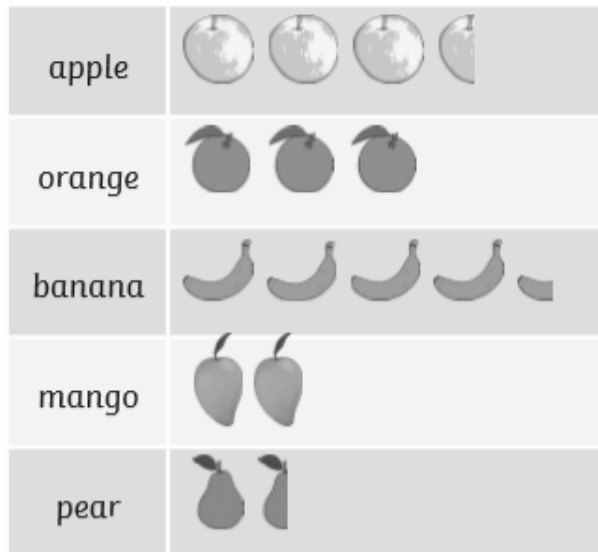


a) 7 children chose pink as their favourite colour. Draw the bar on the graph to show how many children chose pink.

b) Janie used a tally chart to collect the information. Show the number of children who chose pink, using a tally.

Pink	
------	--

20. A class of children chose their favourite fruit. This pictogram shows the results. Each piece of fruit represents 2 children.



a) Which was the favourite fruit and how many children chose it as their favourite?

favourite fruit

children

b) How many more children chose apples as their favourite fruit than pears?

14. Draw hands on this clock to show the time half past two.



End of Quiz