

# Varied Fluency

## Step 9: Find Change

### National Curriculum Objectives:

Mathematics Year 2: (2M3a) [Recognise and use symbols for pounds \(£\) and pence \(p\); combine amounts to make a particular value](#)

Mathematics Year 2: (2M3b) [Find different combinations of coins that equal the same amounts of money](#)

Mathematics Year 2: (2M9) [Solve simple problems in a practical context involving addition and subtraction of money of the same unit, including giving change](#)

### Differentiation:

**Developing** Questions to support finding change. All amounts in multiple of 10 pence.

**Expected** Questions to support finding change. Starting amounts are multiples of 10 pence up to £1.

**Greater Depth** Questions to support finding change from given amounts of up to £1.

Questions include written amounts of multiple values.

More [Year 2 Money](#) resources.

Did you like this resource? Don't forget to [review](#) it on our website.

## Find Change

1a. George has the coins below.



He spends 30p.  
Tick the correct change.



VF

## Find Change

1b. Lynn has the coins below.

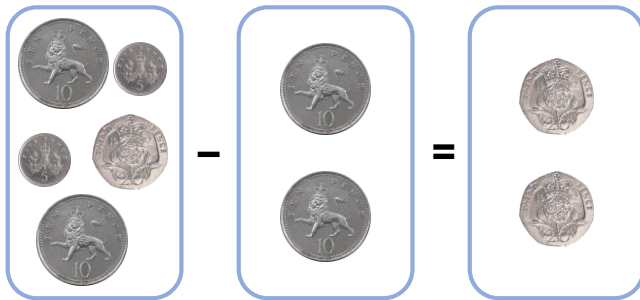


She spends 20p.  
Tick the correct change.




VF

2a. True or false?



VF

2b. True or false?




VF

3a. Complete the bar model.




VF

3b. Complete the bar model.



VF

4a. Ally has 80p and is given the coins below as change.




Which item did Ally buy?



VF

4b. Nathan has 70p and is given the coins below as change.



Which item did Avery buy?




VF

## Find Change

5a. Seth has the coins below.



He spends 23p.  
Tick the correct change.




VF

## Find Change

5b. Claire has the coins below.

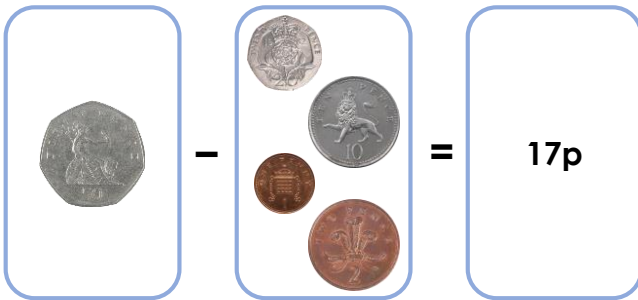


She spends 19p.  
Tick the correct change.



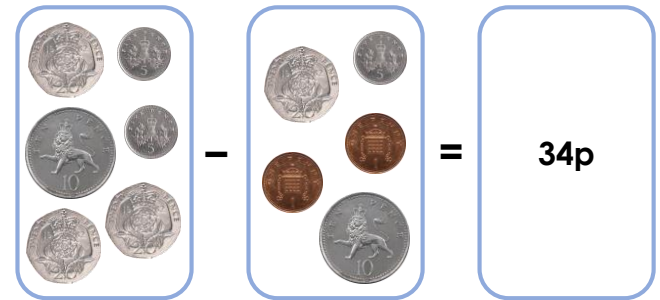
VF

6a. True or false?




VF

6b. True or false?



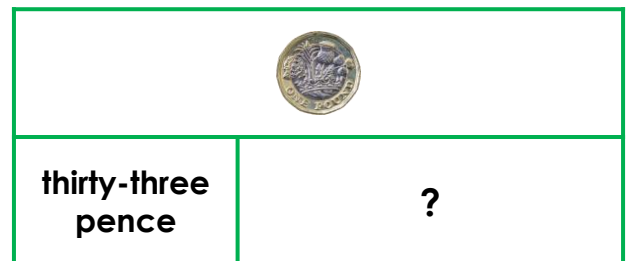
VF

7a. Complete the bar model.



VF

7b. Complete the bar model.




VF

8a. Monika has £1 and is given the coins below as change.



Which item did Monika buy?



VF

8b. Avery has 90p and is given the coins below as change.



Which item did Avery buy?



VF

## Find Change


9a. Beth has the coins listed below.

3 lots of  
20p coins

3 lots of  
5p coins

2 lots of  
1p coins

She spends 43p.  
Tick the correct change



VF

## Find Change

9b. Will has the coins below.



He spends 37p.  
Tick the correct change.

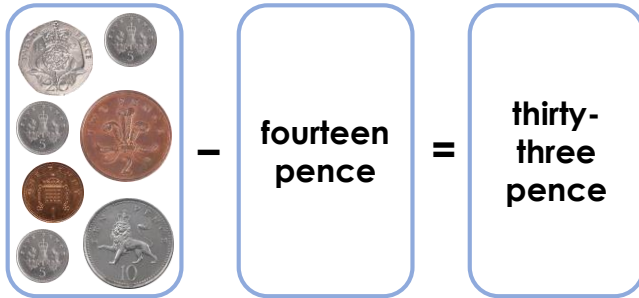
3 lots of 10p coins  
1 lot of 20p coins  
1 lot of 2p coins

5 lots of 5p coins  
1 lot of 20p coins  
6 lots of 1p coins



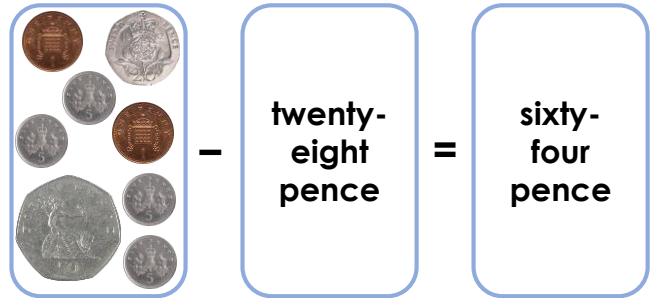
VF

10a. True or false?



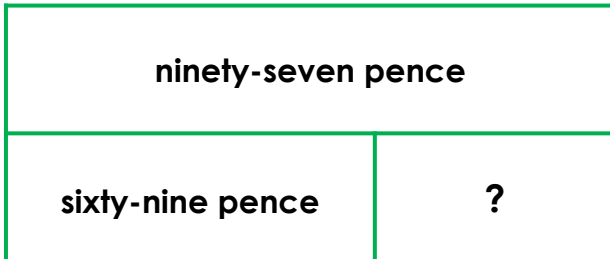
VF

10b. True or false?



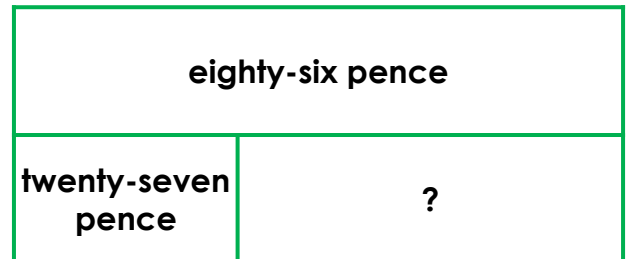
VF

11a. Complete the bar model.



VF

11b. Complete the bar model.



VF

12a. Daniella has seventy-six pence and is given the coins below as change.

4 lots of  
5p coins

2 lots of  
2p coins

7 lots of  
1p coins

Which item did Daniella buy?



46p



45p



54p



VF

12b. Jackson has eighty-four pence and is given the coins below as change.

7 lots of  
1p coins

4 lots of  
10p coins

2 lots of  
5p coins

Which item did Avery buy?



25p



27p



26p



VF

**Varied Fluency**  
**Find Change**

**Developing**

- 1a. 50p
- 2a. False – 30p
- 3a. 30p
- 4a. Ball

**Expected**

- 5a. 47p
- 6a. True
- 7a. 38p
- 8a. Yo-yo

**Greater Depth**

- 9a. 34p
- 10a. False – 34p
- 11a. 28p
- 12a. Bag of marbles

**Varied Fluency**  
**Find Change**

**Developing**

- 1b. 40p
- 2b. True
- 3b. 80p
- 4b. Robot

**Expected**

- 5b. 61p
- 6b. False – 43p
- 7b. 67p
- 8b. Book

**Greater Depth**

- 9b. 51p
- 10b. True
- 11b. 59p
- 12b. Grapes