

Starter:

Lets play simon says.

Wednesday 22<sup>nd</sup> September 2021

Reception LO: To recognise numerals 1 to 5.

**Must:** Can count in ones.

**Should:** Recognise numerals 1 to 5.

**Could:** Can put the numbers in the correct order.

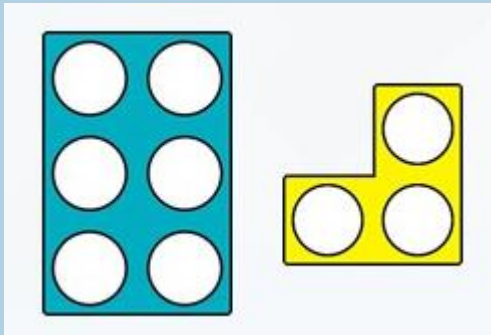
Year 1 LO: To count one more.

**Must:** Can represent one more by objects


**Should:** Represent one more through pictorials.

**Could:** Solve a problem using their maths knowledge.

Complete each box using a picture, a numeral and a word.



→  
one more



(picture)

5

→  
one more

6

(numeral)

three


→  
one more

four


(word)

Complete each box using a picture, a numeral and a word.


(picture)



→  
one more



(numeral)



→  
one more

1

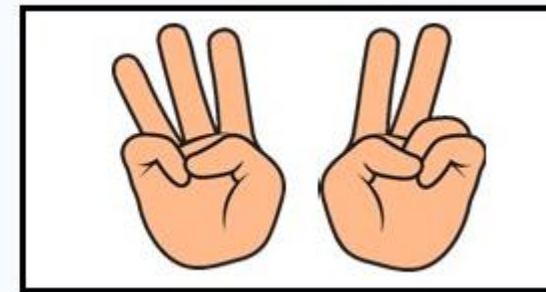

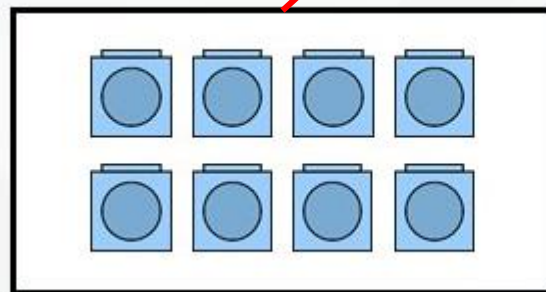


(word)



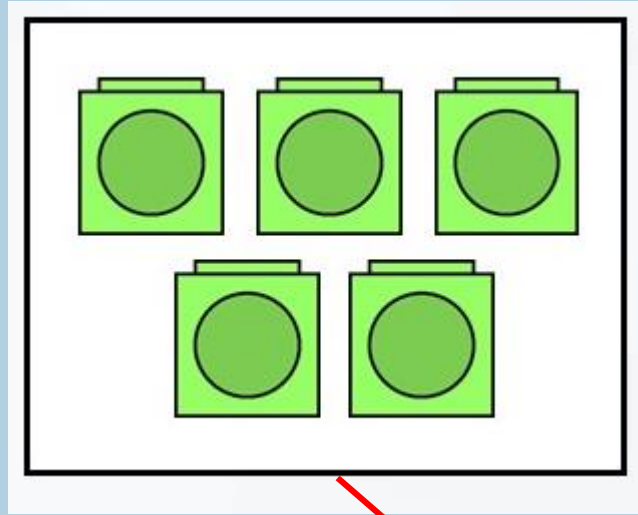
→  
one more

ten

One of the pictures shows one more than the digit card.  
Draw a line from the digit card to the correct picture.



One of the numbers is one more than the cubes shown.  
Draw a line from the cubes to the correct number.



7

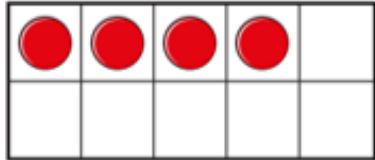
4

6

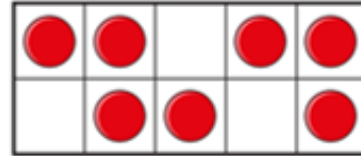
8

# Your Task:

1 Draw one more than 4



Draw one more than 7



2 Shade the box showing the correct answer.

2

4

→  
is one more than

3

7

8

→  
is one more than

6

2

1

→  
is one more than

0

8

10

→  
is one more than

9

**NEXT  
STEP**



Complete the number track.

1	2	3	4		6
---	---	---	---	--	---



Can you find the answer: 1  
more

Draw on your whiteboard.

