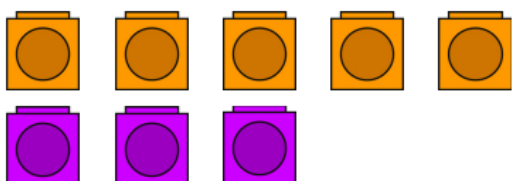


15/11/21

LO: To subtract using partitioning.

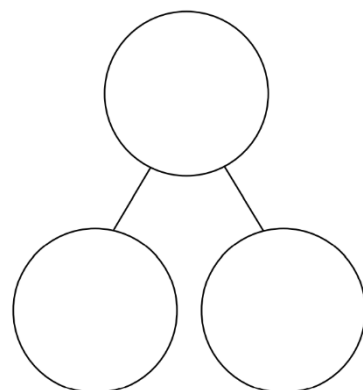
P		CT
	Must: recognise the subtraction symbol.	
	Should: use a part whole model to subtract numbers accurately.	
	Could: Write a number sentence using the correct symbols.	

How many cubes are not purple?
How many in total?

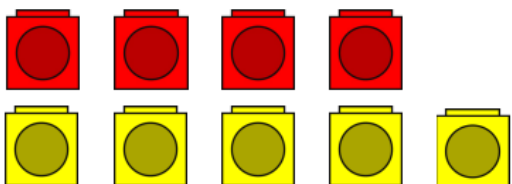


$$\square - \square = \square$$

$$\square = \square - \square$$

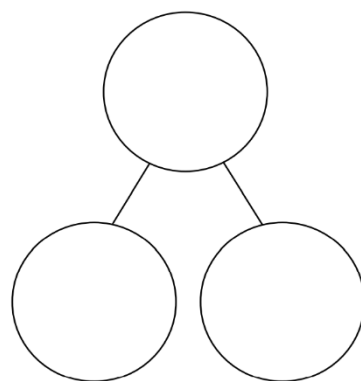


How many cubes are not red?
How many in total?

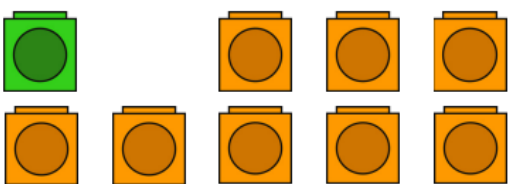


$$\square - \square = \square$$

$$\square = \square - \square$$

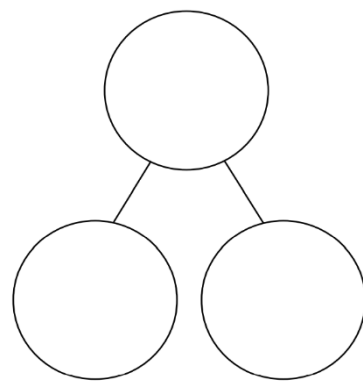


How many cubes are not green?
How many in total?

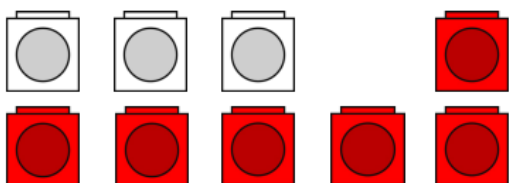


$$\square - \square = \square$$

$$\square = \square - \square$$



How many cubes are not white?
How many in total?



$$\square - \square = \square$$

$$\square = \square - \square$$

