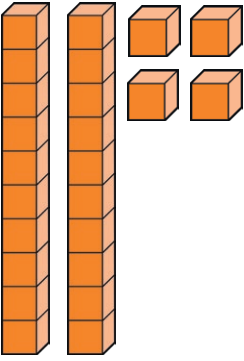
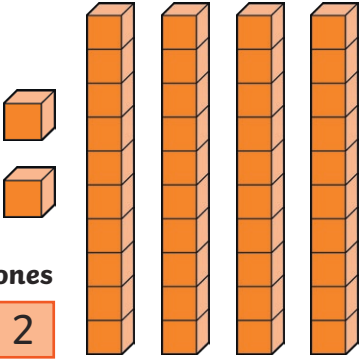
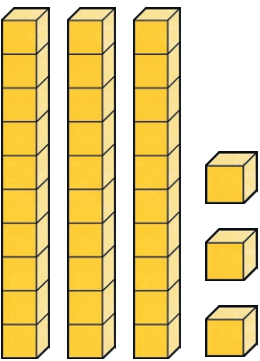
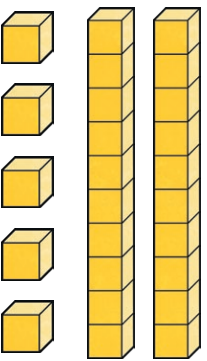
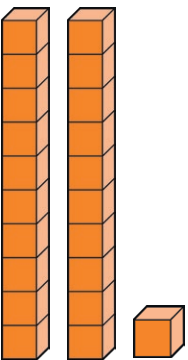
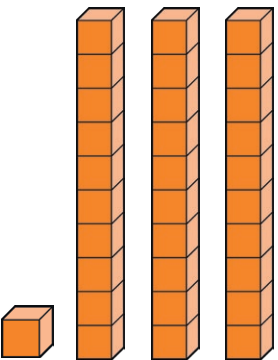
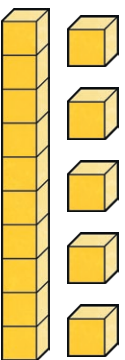
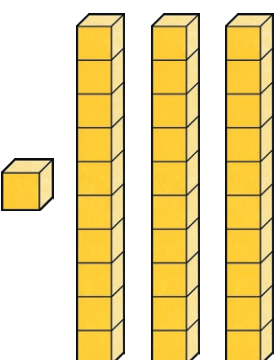
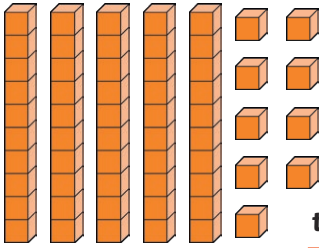
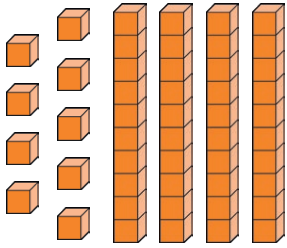
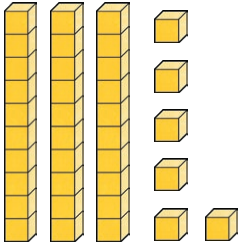
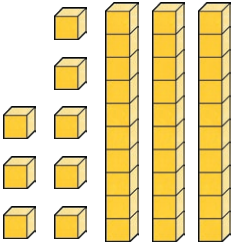

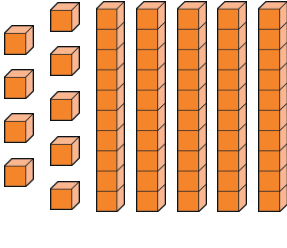
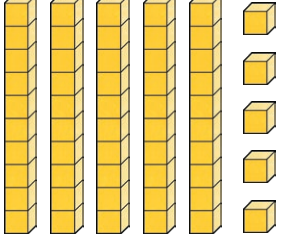
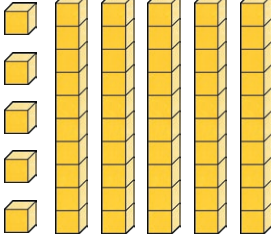


Greater Than or Less Than

Compare these numbers. Write the number shown by the pictures then circle the correct sign. The first one is an example.



 <div style="display: flex; justify-content: space-around; margin-top: 10px;"> tens ones </div> <div style="display: flex; justify-content: space-around; margin-top: 5px;"> <div style="border: 1px solid black; width: 30px; height: 30px; text-align: center; line-height: 30px;">2</div> <div style="border: 1px solid black; width: 30px; height: 30px; text-align: center; line-height: 30px;">4</div> </div>	<div style="display: flex; justify-content: space-around; align-items: center;"> more than <div style="border: 2px solid orange; border-radius: 50%; padding: 10px; display: inline-block;">less than</div> equal to </div>	 <div style="display: flex; justify-content: space-around; margin-top: 10px;"> tens ones </div> <div style="display: flex; justify-content: space-around; margin-top: 5px;"> <div style="border: 1px solid black; width: 30px; height: 30px; text-align: center; line-height: 30px;">4</div> <div style="border: 1px solid black; width: 30px; height: 30px; text-align: center; line-height: 30px;">2</div> </div>
 <div style="display: flex; justify-content: space-around; margin-top: 10px;"> tens ones </div> <div style="display: flex; justify-content: space-around; margin-top: 5px;"> <div style="border: 1px solid black; width: 30px; height: 30px;"></div> <div style="border: 1px solid black; width: 30px; height: 30px;"></div> </div>	<div style="display: flex; justify-content: space-around; align-items: center;"> more than less than equal to </div>	 <div style="display: flex; justify-content: space-around; margin-top: 10px;"> tens ones </div> <div style="display: flex; justify-content: space-around; margin-top: 5px;"> <div style="border: 1px solid black; width: 30px; height: 30px;"></div> <div style="border: 1px solid black; width: 30px; height: 30px;"></div> </div>
 <div style="display: flex; justify-content: space-around; margin-top: 10px;"> tens ones </div> <div style="display: flex; justify-content: space-around; margin-top: 5px;"> <div style="border: 1px solid black; width: 30px; height: 30px;"></div> <div style="border: 1px solid black; width: 30px; height: 30px;"></div> </div>	<div style="display: flex; justify-content: space-around; align-items: center;"> more than less than equal to </div>	 <div style="display: flex; justify-content: space-around; margin-top: 10px;"> tens ones </div> <div style="display: flex; justify-content: space-around; margin-top: 5px;"> <div style="border: 1px solid black; width: 30px; height: 30px;"></div> <div style="border: 1px solid black; width: 30px; height: 30px;"></div> </div>
 <div style="display: flex; justify-content: space-around; margin-top: 10px;"> tens ones </div> <div style="display: flex; justify-content: space-around; margin-top: 5px;"> <div style="border: 1px solid black; width: 30px; height: 30px;"></div> <div style="border: 1px solid black; width: 30px; height: 30px;"></div> </div>	<div style="display: flex; justify-content: space-around; align-items: center;"> more than less than equal to </div>	 <div style="display: flex; justify-content: space-around; margin-top: 10px;"> tens ones </div> <div style="display: flex; justify-content: space-around; margin-top: 5px;"> <div style="border: 1px solid black; width: 30px; height: 30px;"></div> <div style="border: 1px solid black; width: 30px; height: 30px;"></div> </div>

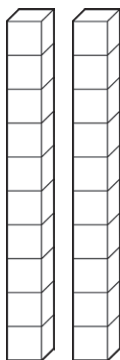
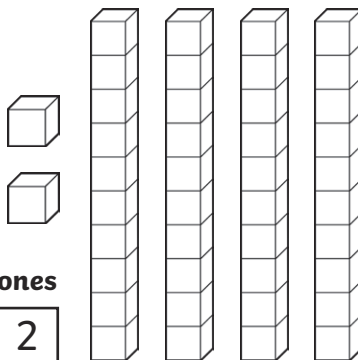
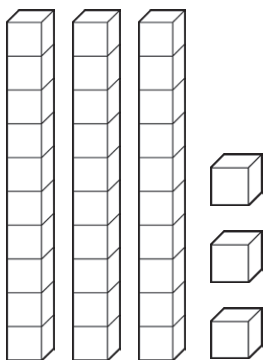
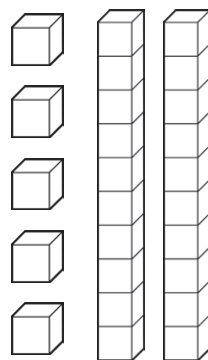
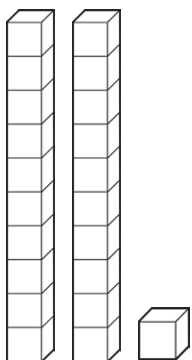
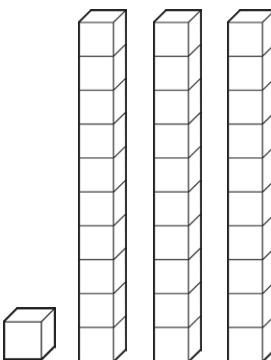
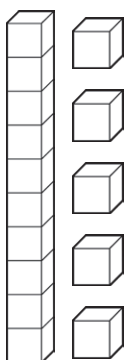
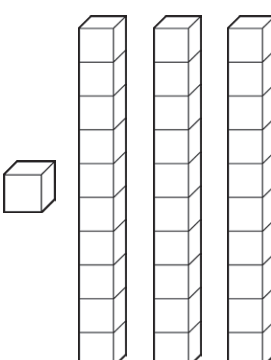
 <p>tens ones</p> <div style="display: flex; justify-content: space-around;"> <div style="border: 1px solid black; width: 30px; height: 20px;"></div> <div style="border: 1px solid black; width: 30px; height: 20px;"></div> </div>	<p>more than less than equal to</p>	 <p>tens ones</p> <div style="display: flex; justify-content: space-around;"> <div style="border: 1px solid black; width: 30px; height: 20px;"></div> <div style="border: 1px solid black; width: 30px; height: 20px;"></div> </div>
 <p>tens ones</p> <div style="display: flex; justify-content: space-around;"> <div style="border: 1px solid black; width: 30px; height: 20px;"></div> <div style="border: 1px solid black; width: 30px; height: 20px;"></div> </div>	<p>more than less than equal to</p>	 <p>tens ones</p> <div style="display: flex; justify-content: space-around;"> <div style="border: 1px solid black; width: 30px; height: 20px;"></div> <div style="border: 1px solid black; width: 30px; height: 20px;"></div> </div>
 <p>tens ones</p> <div style="display: flex; justify-content: space-around;"> <div style="border: 1px solid black; width: 30px; height: 20px;"></div> <div style="border: 1px solid black; width: 30px; height: 20px;"></div> </div>	<p>more than less than equal to</p>	 <p>tens ones</p> <div style="display: flex; justify-content: space-around;"> <div style="border: 1px solid black; width: 30px; height: 20px;"></div> <div style="border: 1px solid black; width: 30px; height: 20px;"></div> </div>
 <p>tens ones</p> <div style="display: flex; justify-content: space-around;"> <div style="border: 1px solid black; width: 30px; height: 20px;"></div> <div style="border: 1px solid black; width: 30px; height: 20px;"></div> </div>	<p>more than less than equal to</p>	 <p>tens ones</p> <div style="display: flex; justify-content: space-around;"> <div style="border: 1px solid black; width: 30px; height: 20px;"></div> <div style="border: 1px solid black; width: 30px; height: 20px;"></div> </div>

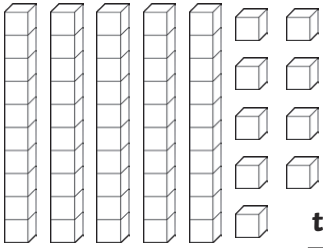
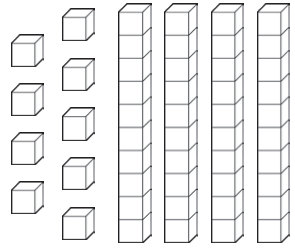
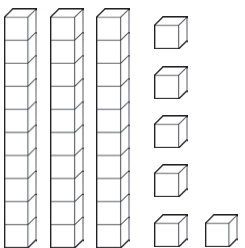
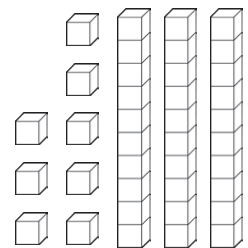

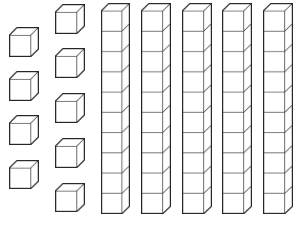
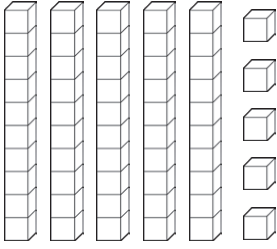
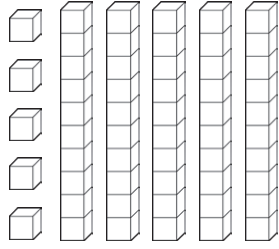


Greater Than or Less Than **Answers**

Compare these numbers. Write the number shown by the pictures then circle the correct sign. The first one is an example.



 <div>tens ones</div> <div>2 4</div>	<div>more than</div> <div>less than</div> <div>equal to</div>	<div>  <div>tens ones</div> <div>4 2</div> </div>
 <div>tens ones</div> <div>3 3</div>	<div>more than</div> <div>less than</div> <div>equal to</div>	<div>  <div>tens ones</div> <div>2 5</div> </div>
 <div>tens ones</div> <div>2 1</div>	<div>more than</div> <div>less than</div> <div>equal to</div>	<div>  <div>tens ones</div> <div>3 1</div> </div>
 <div>tens ones</div> <div>1 5</div>	<div>more than</div> <div>less than</div> <div>equal to</div>	<div>  <div>tens ones</div> <div>3 1</div> </div>

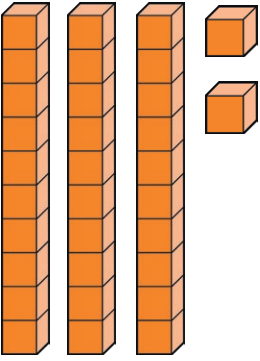
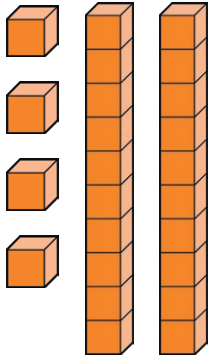
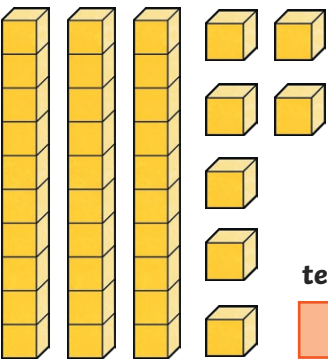
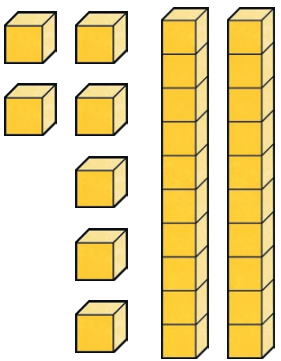

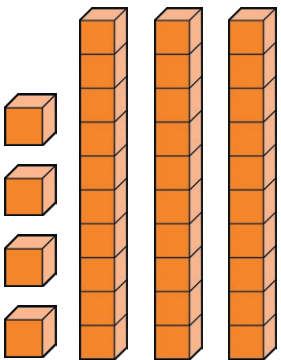
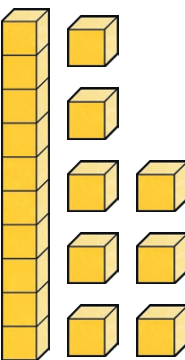
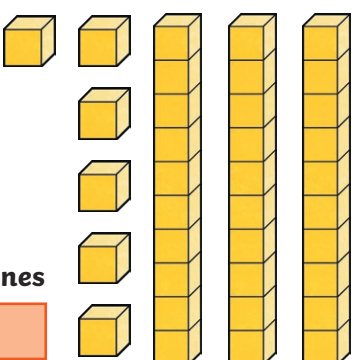
 <p>tens ones 5 9</p>	<p>more than less than equal to</p>	 <p>tens ones 4 9</p>
 <p>tens ones 3 6</p>	<p>more than less than equal to</p>	 <p>tens ones 3 8</p>
 <p>tens ones 7 3</p>	<p>more than less than equal to</p>	 <p>tens ones 5 9</p>
 <p>tens ones 5 5</p>	<p>more than less than equal to</p>	 <p>tens ones 5 5</p>

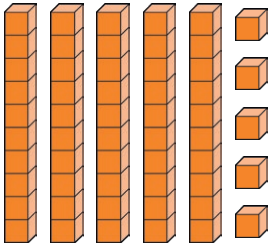
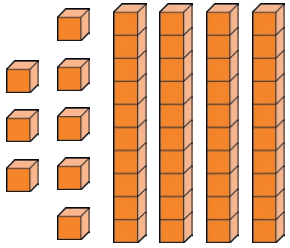
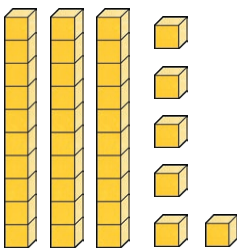
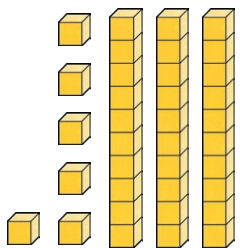



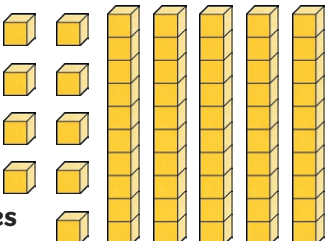


Greater Than or Less Than

Compare these numbers. Write the number shown by the pictures then circle the correct sign. The first one is an example.



 <div style="display: flex; justify-content: flex-end; align-items: center;"> <div style="text-align: center;">tens</div> <div style="text-align: center;">ones</div> </div> <div style="display: flex; justify-content: flex-end; align-items: center;"> <div style="border: 1px solid black; padding: 2px 10px; margin: 0 5px;">3</div> <div style="border: 1px solid black; padding: 2px 10px; margin: 0 5px;">2</div> </div>	<div style="font-size: 48px; margin-bottom: 10px;">></div> <div style="font-size: 48px; margin-bottom: 10px;"><</div> <div style="font-size: 48px;">=</div>	 <div style="display: flex; justify-content: flex-end; align-items: center;"> <div style="text-align: center;">tens</div> <div style="text-align: center;">ones</div> </div> <div style="display: flex; justify-content: flex-end; align-items: center;"> <div style="border: 1px solid black; padding: 2px 10px; margin: 0 5px;">2</div> <div style="border: 1px solid black; padding: 2px 10px; margin: 0 5px;">4</div> </div>
 <div style="display: flex; justify-content: flex-end; align-items: center;"> <div style="text-align: center;">tens</div> <div style="text-align: center;">ones</div> </div> <div style="display: flex; justify-content: flex-end; align-items: center;"> <div style="border: 1px solid black; padding: 2px 10px; margin: 0 5px;"></div> <div style="border: 1px solid black; padding: 2px 10px; margin: 0 5px;"></div> </div>	<div style="font-size: 48px; margin-bottom: 10px;">></div> <div style="font-size: 48px; margin-bottom: 10px;"><</div> <div style="font-size: 48px;">=</div>	 <div style="display: flex; justify-content: flex-end; align-items: center;"> <div style="text-align: center;">tens</div> <div style="text-align: center;">ones</div> </div> <div style="display: flex; justify-content: flex-end; align-items: center;"> <div style="border: 1px solid black; padding: 2px 10px; margin: 0 5px;"></div> <div style="border: 1px solid black; padding: 2px 10px; margin: 0 5px;"></div> </div>
 <div style="display: flex; justify-content: flex-end; align-items: center;"> <div style="text-align: center;">tens</div> <div style="text-align: center;">ones</div> </div> <div style="display: flex; justify-content: flex-end; align-items: center;"> <div style="border: 1px solid black; padding: 2px 10px; margin: 0 5px;"></div> <div style="border: 1px solid black; padding: 2px 10px; margin: 0 5px;"></div> </div>	<div style="font-size: 48px; margin-bottom: 10px;">></div> <div style="font-size: 48px; margin-bottom: 10px;"><</div> <div style="font-size: 48px;">=</div>	 <div style="display: flex; justify-content: flex-end; align-items: center;"> <div style="text-align: center;">tens</div> <div style="text-align: center;">ones</div> </div> <div style="display: flex; justify-content: flex-end; align-items: center;"> <div style="border: 1px solid black; padding: 2px 10px; margin: 0 5px;"></div> <div style="border: 1px solid black; padding: 2px 10px; margin: 0 5px;"></div> </div>
 <div style="display: flex; justify-content: flex-end; align-items: center;"> <div style="text-align: center;">tens</div> <div style="text-align: center;">ones</div> </div> <div style="display: flex; justify-content: flex-end; align-items: center;"> <div style="border: 1px solid black; padding: 2px 10px; margin: 0 5px;"></div> <div style="border: 1px solid black; padding: 2px 10px; margin: 0 5px;"></div> </div>	<div style="font-size: 48px; margin-bottom: 10px;">></div> <div style="font-size: 48px; margin-bottom: 10px;"><</div> <div style="font-size: 48px;">=</div>	 <div style="display: flex; justify-content: flex-end; align-items: center;"> <div style="text-align: center;">tens</div> <div style="text-align: center;">ones</div> </div> <div style="display: flex; justify-content: flex-end; align-items: center;"> <div style="border: 1px solid black; padding: 2px 10px; margin: 0 5px;"></div> <div style="border: 1px solid black; padding: 2px 10px; margin: 0 5px;"></div> </div>

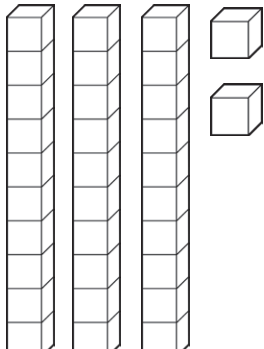
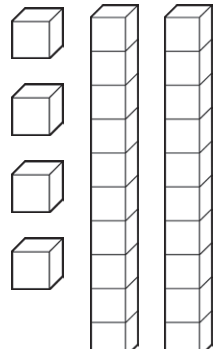
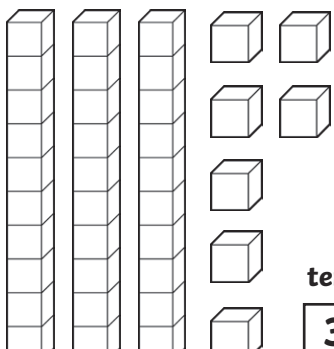
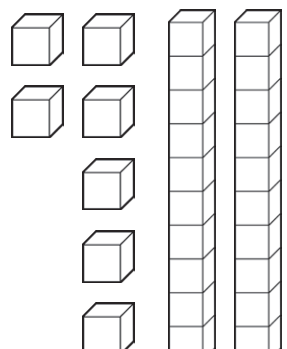
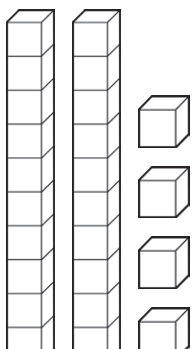
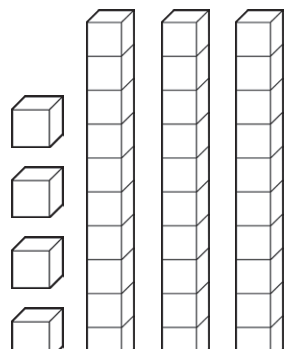
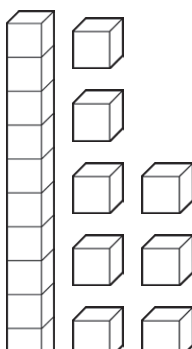
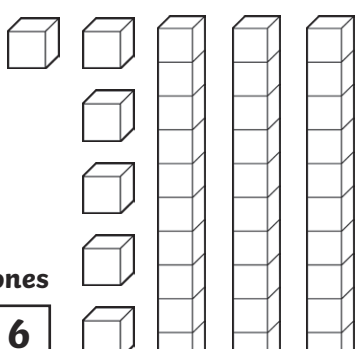
 <p>tens ones</p> <div style="display: flex; justify-content: space-around;"> <div style="border: 1px solid black; width: 30px; height: 20px;"></div> <div style="border: 1px solid black; width: 30px; height: 20px;"></div> </div>	<p>> < =</p>	 <p>tens ones</p> <div style="display: flex; justify-content: space-around;"> <div style="border: 1px solid black; width: 30px; height: 20px;"></div> <div style="border: 1px solid black; width: 30px; height: 20px;"></div> </div>
 <p>tens ones</p> <div style="display: flex; justify-content: space-around;"> <div style="border: 1px solid black; width: 30px; height: 20px;"></div> <div style="border: 1px solid black; width: 30px; height: 20px;"></div> </div>	<p>> < =</p>	 <p>tens ones</p> <div style="display: flex; justify-content: space-around;"> <div style="border: 1px solid black; width: 30px; height: 20px;"></div> <div style="border: 1px solid black; width: 30px; height: 20px;"></div> </div>
 <p>tens ones</p> <div style="display: flex; justify-content: space-around;"> <div style="border: 1px solid black; width: 30px; height: 20px;"></div> <div style="border: 1px solid black; width: 30px; height: 20px;"></div> </div>	<p>> < =</p>	 <p>tens ones</p> <div style="display: flex; justify-content: space-around;"> <div style="border: 1px solid black; width: 30px; height: 20px;"></div> <div style="border: 1px solid black; width: 30px; height: 20px;"></div> </div>
 <p>tens ones</p> <div style="display: flex; justify-content: space-around;"> <div style="border: 1px solid black; width: 30px; height: 20px;"></div> <div style="border: 1px solid black; width: 30px; height: 20px;"></div> </div>	<p>> < =</p>	 <p>tens ones</p> <div style="display: flex; justify-content: space-around;"> <div style="border: 1px solid black; width: 30px; height: 20px;"></div> <div style="border: 1px solid black; width: 30px; height: 20px;"></div> </div>

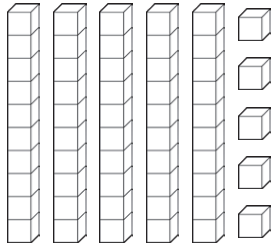
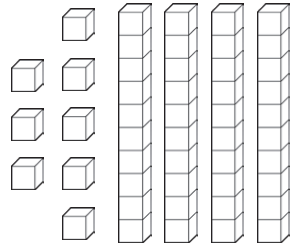
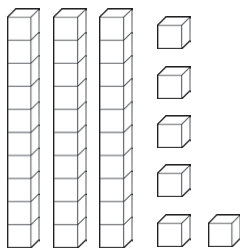
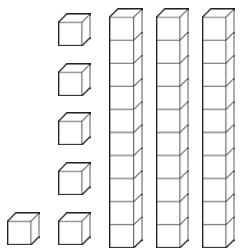


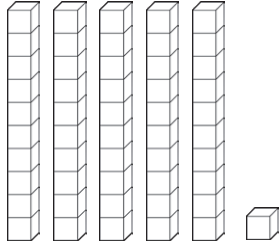
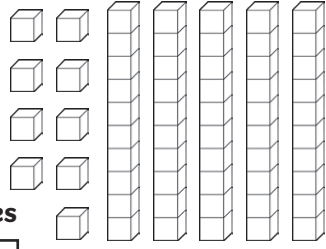


Greater Than or Less Than **Answers**

Compare these numbers. Write the number shown by the pictures then circle the correct sign. The first one is an example.



 <div style="display: flex; justify-content: flex-end; align-items: center;"> <div style="text-align: center;">tens</div> <div style="text-align: center;">ones</div> </div> <div style="display: flex; justify-content: flex-end; align-items: center;"> <div style="border: 1px solid black; padding: 2px 10px;">3</div> <div style="border: 1px solid black; padding: 2px 10px;">2</div> </div>	<div style="text-align: center; font-size: 2em;"> > < = </div>	 <div style="display: flex; justify-content: flex-end; align-items: center;"> <div style="text-align: center;">tens</div> <div style="text-align: center;">ones</div> </div> <div style="display: flex; justify-content: flex-end; align-items: center;"> <div style="border: 1px solid black; padding: 2px 10px;">2</div> <div style="border: 1px solid black; padding: 2px 10px;">4</div> </div>
 <div style="display: flex; justify-content: flex-end; align-items: center;"> <div style="text-align: center;">tens</div> <div style="text-align: center;">ones</div> </div> <div style="display: flex; justify-content: flex-end; align-items: center;"> <div style="border: 1px solid black; padding: 2px 10px;">3</div> <div style="border: 1px solid black; padding: 2px 10px;">7</div> </div>	<div style="text-align: center; font-size: 2em;"> > < = </div>	 <div style="display: flex; justify-content: flex-end; align-items: center;"> <div style="text-align: center;">tens</div> <div style="text-align: center;">ones</div> </div> <div style="display: flex; justify-content: flex-end; align-items: center;"> <div style="border: 1px solid black; padding: 2px 10px;">2</div> <div style="border: 1px solid black; padding: 2px 10px;">7</div> </div>
 <div style="display: flex; justify-content: flex-end; align-items: center;"> <div style="text-align: center;">tens</div> <div style="text-align: center;">ones</div> </div> <div style="display: flex; justify-content: flex-end; align-items: center;"> <div style="border: 1px solid black; padding: 2px 10px;">2</div> <div style="border: 1px solid black; padding: 2px 10px;">4</div> </div>	<div style="text-align: center; font-size: 2em;"> > < = </div>	 <div style="display: flex; justify-content: flex-end; align-items: center;"> <div style="text-align: center;">tens</div> <div style="text-align: center;">ones</div> </div> <div style="display: flex; justify-content: flex-end; align-items: center;"> <div style="border: 1px solid black; padding: 2px 10px;">3</div> <div style="border: 1px solid black; padding: 2px 10px;">4</div> </div>
 <div style="display: flex; justify-content: flex-end; align-items: center;"> <div style="text-align: center;">tens</div> <div style="text-align: center;">ones</div> </div> <div style="display: flex; justify-content: flex-end; align-items: center;"> <div style="border: 1px solid black; padding: 2px 10px;">1</div> <div style="border: 1px solid black; padding: 2px 10px;">8</div> </div>	<div style="text-align: center; font-size: 2em;"> > < = </div>	 <div style="display: flex; justify-content: flex-end; align-items: center;"> <div style="text-align: center;">tens</div> <div style="text-align: center;">ones</div> </div> <div style="display: flex; justify-content: flex-end; align-items: center;"> <div style="border: 1px solid black; padding: 2px 10px;">3</div> <div style="border: 1px solid black; padding: 2px 10px;">6</div> </div>









 <p>tens ones 5 5</p>	<p>> < =</p>	 <p>tens ones 4 8</p>
 <p>tens ones 3 6</p>	<p>> < =</p>	 <p>tens ones 3 6</p>
 <p>tens ones 7 2</p>	<p>> < =</p>	 <p>tens ones 5 0</p>
 <p>tens ones 5 1</p>	<p>> < =</p>	 <p>tens ones 5 9</p>



Greater Than or Less Than

Compare these numbers in numerals and words. Circle the correct sign.



	$>$ $<$ $=$	
	$>$ $<$ $=$	
	$>$ $<$ $=$	
	$>$ $<$ $=$	









	<p>> < =</p>	
	<p>> < =</p>	
	<p>> < =</p>	
	<p>> < =</p>	










Greater Than or Less Than **Answers**

Compare these numbers in numerals and words. Circle the correct sign.



 56	<div><div>></div><div><</div><div>-</div></div>	 forty-nine
 two tens and three ones	<div><div>></div><div><</div><div>-</div></div>	 32
 87	<div><div>></div><div><</div><div>-</div></div>	 eighty-seven
 sixty-three	<div><div>></div><div><</div><div>-</div></div>	 36

	<p>$>$ $<$ $=$</p>	
	<p>$>$ $<$ $=$</p>	
	<p>$>$ $<$ $=$</p>	
	<p>$>$ $<$ $=$</p>	