

Complete the sentences.

a



There are _____ equal groups with _____ in each group.

b



There are _____ equal groups with _____ in each group.

c



There are _____ equal groups with _____ in each group.

d



There are _____ equal groups with _____ in each group.

e






There are _____ equal groups with _____ in each group.



1 Are these groups equal?

Discuss with your talking partner and explain why.

a




b



2 There are 5 equal groups with three in each group. Draw a picture to show this.

1 Tick (✓) the sentence that describes the groups below.

a



a) There are 2 equal groups with 10 in each group.

☐

b) There are 10 equal groups with 2 in each group.

☐

b



a) There are 5 equal groups with 3 in each group.


☐

b) There are 3 equal groups with 5 in each group.

☐

1 The groups below are equal. Tick (✓) true or false.

a




True

☐

False

☐

b



True

☐

False

☐

2 Put the counters into three equal groups.

a



--	--	--

How many counters in each group?

b



--	--	--

How many counters in each group?
