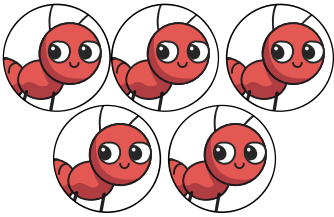


Can you complete these animal subtractions?
Write down the answers on the lines below.



$$- 2 = \underline{\hspace{2cm}}$$



$$- 5 = \underline{\hspace{2cm}}$$




$$- 4 = \underline{\hspace{2cm}}$$



$$- 1 = \underline{\hspace{2cm}}$$



$$- 8 = \underline{\hspace{2cm}}$$



Can you complete these animal subtractions?
Write down the answers on the lines below.



$$- 1 = \underline{\hspace{2cm}}$$



$$- 3 = \underline{\hspace{2cm}}$$




$$- 2 = \underline{\hspace{2cm}}$$



$$- 2 = \underline{\hspace{2cm}}$$



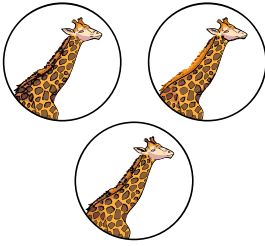
$$- 0 = \underline{\hspace{2cm}}$$



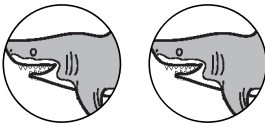
Can you complete these animal subtractions?
Write down the answers on the lines below.



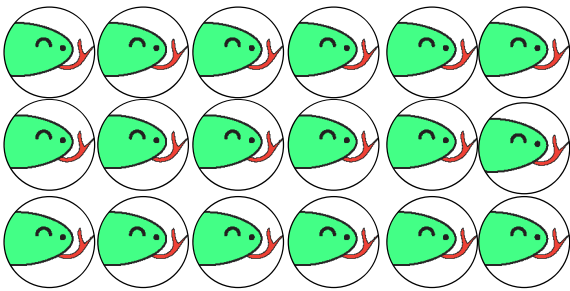
$$- \quad | \quad =$$



$$- \quad 3 \quad =$$



$$- \quad 2 \quad =$$



$$- \quad 2 \quad =$$



$$- \quad 0 \quad =$$
